

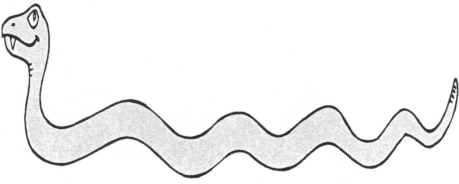







National Federation of Music Clubs – Festival Theory Test
SAMPLE - LEVEL A - SAMPLE

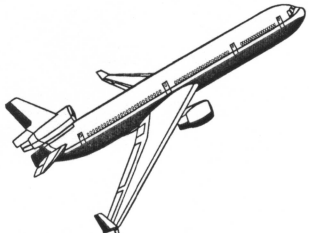





Name: _____ Date: _____ ID: _____ Rating: _____

(Superior 90-100, Excellent 80-89.5, Satisfactory 70-79.5,
Fair 60-69.5, Needs Improvement <60)

1. For each picture below: (12)
 A. Circle HIGH if the picture is something that is high.
 B. Circle LOW if the picture is something that is low.

 LOW HIGH	 LOW HIGH	 LOW HIGH
 LOW HIGH	 LOW HIGH	 LOW HIGH

2. For each picture below: (12)
 A. Circle UP if the picture is something going up.
 B. Circle DOWN if the picture is something going down.

 DOWN UP	 DOWN UP	 DOWN UP
 DOWN UP	 DOWN UP	 DOWN UP

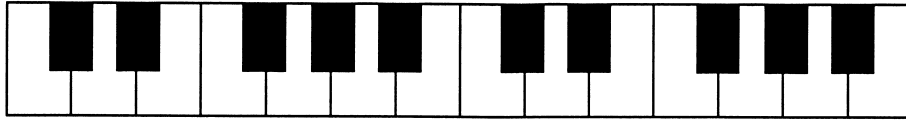
3. Circle only the complete music alphabet in the group of letters below.

(1)

A B C D E F G H I J K L M

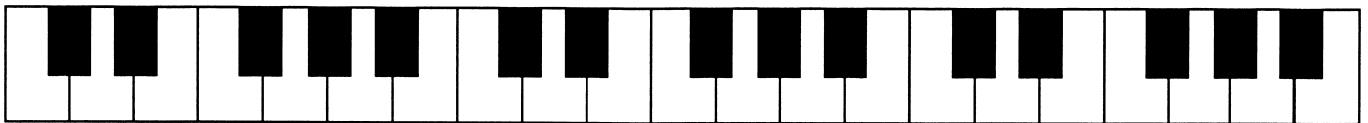
4. On the piano keyboard below, circle each group of two-black-keys.

(4)







5. On the piano keyboard below, circle each group of three-black-keys.

(6)




6. Below each picture, circle the number of objects in each box.

(16)

 <p>1 2 3 4 5</p>	 <p>1 2 3 4 5</p>	 <p>1 2 3 4 5</p>	 <p>1 2 3 4 5</p>
--	--	---	--

7. Circle the line notes.

(10)



8. Circle the space notes.

(10)



Name: _____

9. Write the number one below each quarter note.

(8)



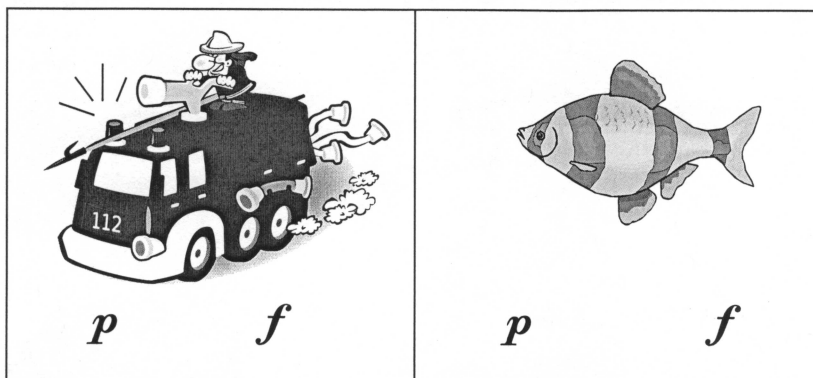
10. For each picture below:

A. Circle **f** if the picture is something that sounds loud.

(3)

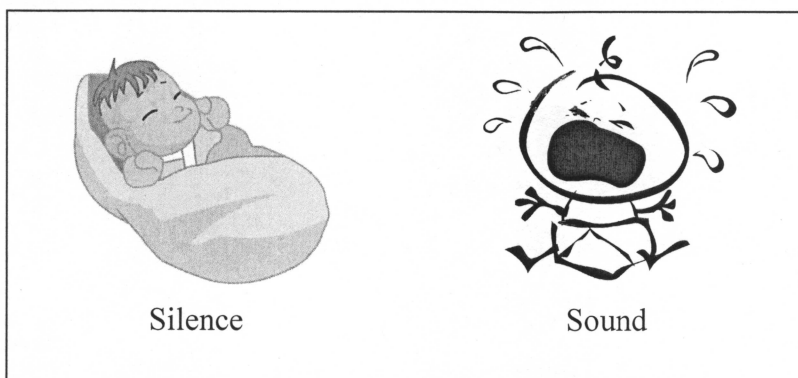
B. Circle **p** if the picture is something that sounds soft.

(3)



11. Circle the correct answer. A quarter rest  is a symbol for:

(3)



12. Fill in the note head to make a quarter note.

(2)



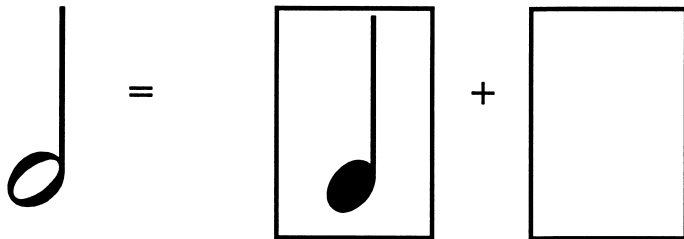
13. Circle one group of letters that correctly shows the complete music alphabet. (4)

A B D F C B G


A B C D E F G

A C D B G A E


14. Draw one note in the box to make a musical math problem. (3)



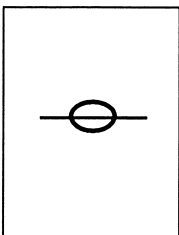
15. Draw a line from each musical symbol to the correct name. (3)



Quarter rest



Bar line



Line note

